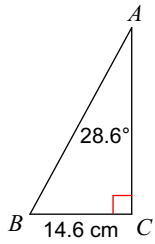


Solving Right Angled Triangles

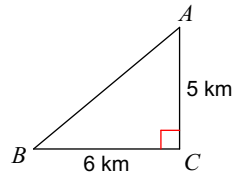
Block: ____ Mark Out Of 24 ____

Solve each triangle. Round answers to the nearest tenth.

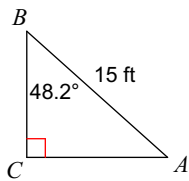
1)



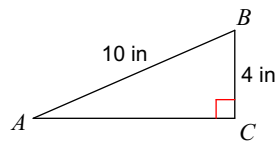
2)



3)



4)



In each problem, angle C is a right angle. Solve each triangle rounding answers to the nearest tenth.

5) $m\angle A = 30^\circ$, $b = 5$ cm

6) $b = 4$ in, $a = 5$ in

7) $a = 4.2$ mi, $c = 8$ mi

8) $m\angle B = 64^\circ$, $c = 2$ km