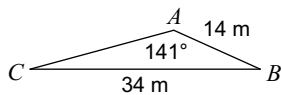


Law of Sines

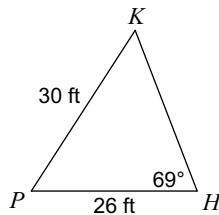
Block: _____

Find each measurement indicated. Round your answers to the nearest tenth.

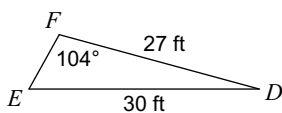
1) Find $m\angle C$



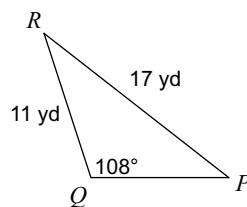
2) Find $m\angle K$



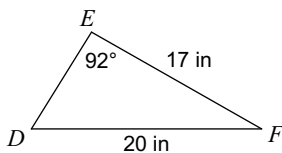
3) Find $m\angle E$



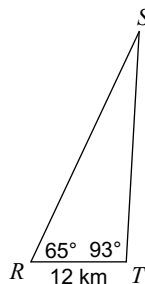
4) Find $m\angle P$



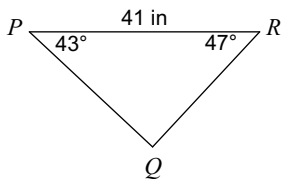
5) Find $m\angle D$



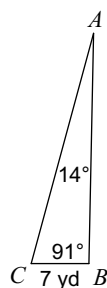
6) Find ST



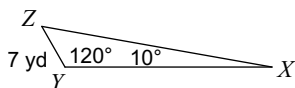
7) Find QR



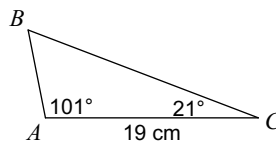
8) Find AC



9) Find XZ



10) Find BC

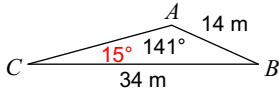


Law of Sines

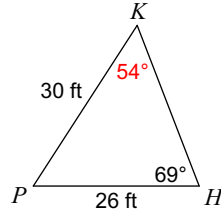
Block: _____

Find each measurement indicated. Round your answers to the nearest tenth.

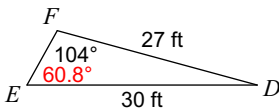
1) Find $m\angle C$



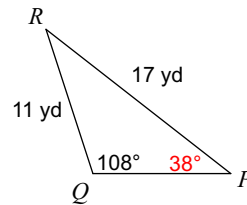
2) Find $m\angle K$



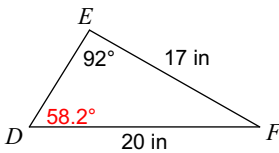
3) Find $m\angle E$



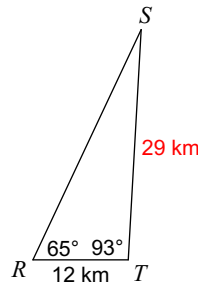
4) Find $m\angle P$



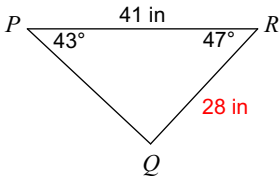
5) Find $m\angle D$



6) Find ST



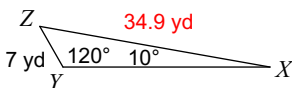
7) Find QR



8) Find AC



9) Find XZ



10) Find BC

